



#1




Which of the following objects is a circle?



Show your work

#2



Which of the following objects is a circle?



Show your work

#3




Which of the following objects is a hexagon?



Show your work

#4



Which of the following objects is a octagon?



Show your work

#5




Which of the following objects is a octagon?



Show your work

#6



Which of the following objects is a pentagon?



Show your work

#7



Which of the following objects is a rectangle?



Show your work

#8



Which of the following objects is a triangle?



Show your work

#9




Which of the following objects is a triangle?



Show your work

#10




Which of the following objects is a pentagon?



Show your work

#11



Which of the following objects is a star?



Show your work

#12

Which of the following objects is a pentagon?



Show your work

Question	Answer
#1	choice 2
#2	choice 1
#3	choice 1
#4	choice 3
#5	choice 3
#6	choice 1
#7	choice 2
#8	choice 2
#9	choice 1
#10	choice 1
#11	choice 3
#12	choice 2