




#1


How many corners does this shape have?

 4 2 6 1

Show your work

#2

How many corners does this shape have?

 5 7 4 6

Show your work

#3

How many sides does this shape have?


 6 7 8 9

Show your work



#4

How many corners does this shape have?

 6 7 5 4

Show your work

#5

How many corners does this shape have?

 7 5 9 10

Show your work

#6

How many sides does this shape have?

 1 0 3 5

Show your work



#7

How many corners does this shape have?



4

7

2

3

Show your work

#8

How many corners does this shape have?



4

6

1

3

Show your work

#9

How many corners does this shape have?



0

4

1


3

Show your work



#10

How many sides does this shape have?

 7 4 3 6

Show your work

#11

How many corners does this shape have?

 7 4 2 5

Show your work

#12

How many corners does this shape have?

 8 3 7 5

Show your work

Question	Answer
#1	4
#2	4
#3	7
#4	4
#5	7
#6	3
#7	4
#8	4
#9	3
#10	4
#11	4
#12	5