




#1

How many sides does this shape have?

 3 6 7 4

Show your work

#2

How many corners does this shape have?

 4 1 5 6

Show your work

#3

How many sides does this shape have?

 4 6 9 8

Show your work



#4

How many sides does this shape have?



7

4

1

6

Show your work

#5

How many corners does this shape have?



1

3

2

4

Show your work

#6

How many corners does this shape have?



5

3

4


6

Show your work



#7

How many sides does this shape have?

 4 6 1 5

Show your work

#8

How many corners does this shape have?

 4 6 7 3

Show your work

#9

How many corners does this shape have?

 2 5 1 4

Show your work



#10

How many corners does this shape have?

 4 7 2 1

Show your work

#11


How many sides does this shape have?

 6 3 4 2

Show your work

#12

How many corners does this shape have?

 3 4 7 1

Show your work

Question	Answer
#1	4
#2	4
#3	6
#4	4
#5	4
#6	4
#7	4
#8	4
#9	4
#10	4
#11	3
#12	4