



#1



Which picture shows $4 - 3 = 1$?



Show your work

#2



Which picture shows $3 - 2 = 1$?



Show your work

#3

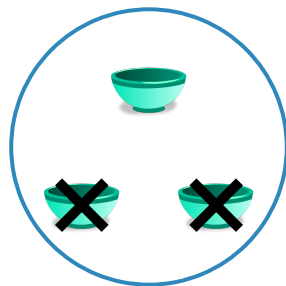

Which picture shows $4 - 1 = 3$?



Show your work

#4

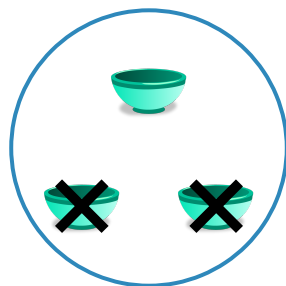
Which picture shows $3 - 2 = 1$?



Show your work

#5


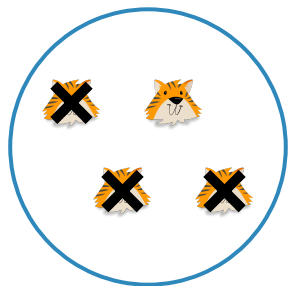
Which picture shows $3 - 2 = 1$?



Show your work

#6



Which picture shows $4 - 3 = 1$?



Show your work

#7



Which picture shows $4 - 3 = 1$?



Show your work

#8

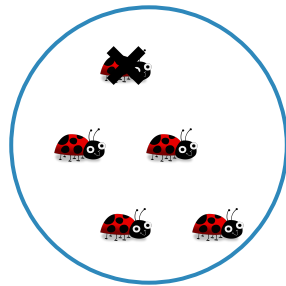
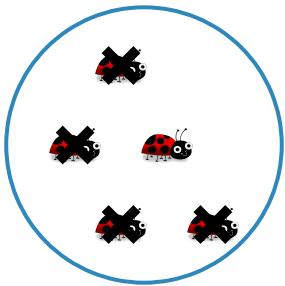
Which picture shows $3 - 2 = 1$?



Show your work

#9

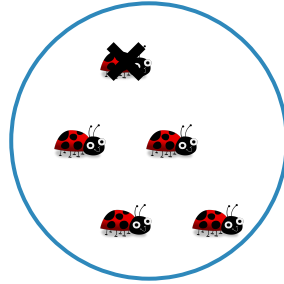
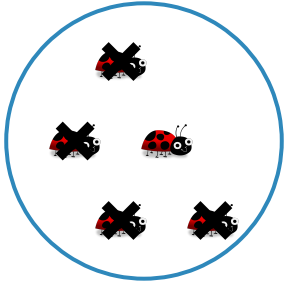
Which picture shows $5 - 1 = 4$?



Show your work

#10

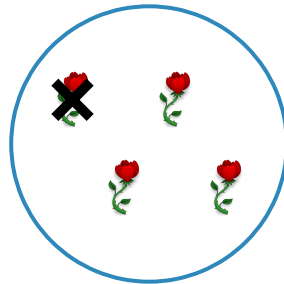
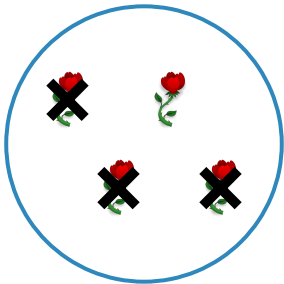
Which picture shows $5 - 1 = 4$?



Show your work

#11

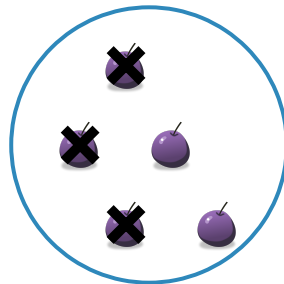
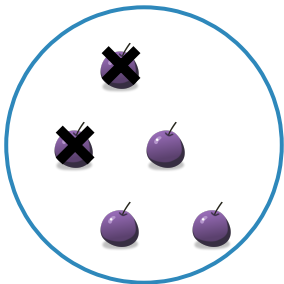
Which picture shows $4 - 3 = 1$?



Show your work

#12

Which picture shows $5 - 3 = 2$?



Show your work

Question	Answer
#1	choice 1
#2	choice 1
#3	choice 2
#4	choice 2
#5	choice 2
#6	choice 1
#7	choice 2
#8	choice 2
#9	choice 2
#10	choice 2
#11	choice 1
#12	choice 2